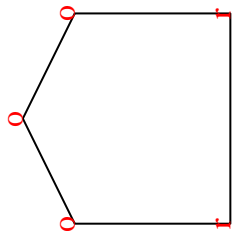




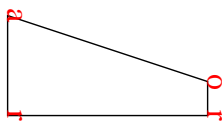


Count the number of Acute, Obtuse and Right angles inside each shape.

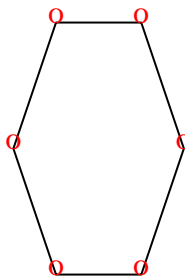
Ex)



1)



2)



Answers

Ex. 0 3 2

1. 1 1 2

2. 0 6 0

3. 0 7 0

4. 0 0 4

5. 3 0 0

6. 0 8 0

7. 0 0 4

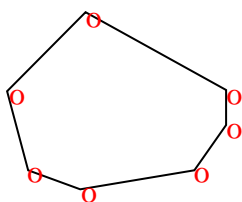
8. 0 4 2

9. 1 4 0

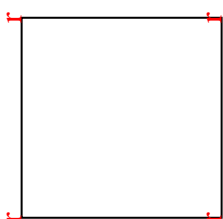
10. 0 6 0

11. 0 6 0

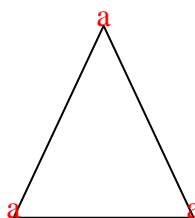
3)



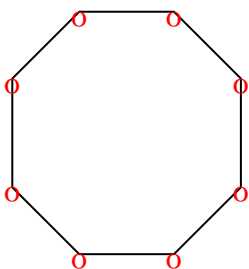
4)



5)



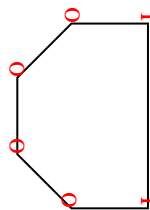
6)



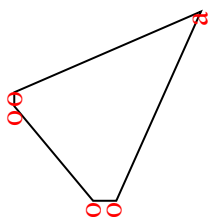
7)



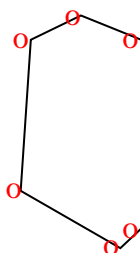
8)



9)



10)



11)

